


Name: _____

Mean, Median, Mode, and Range

Find the mean, median, mode, and range for each set of numbers.



median - _____

mode - _____

range - _____

mean - _____

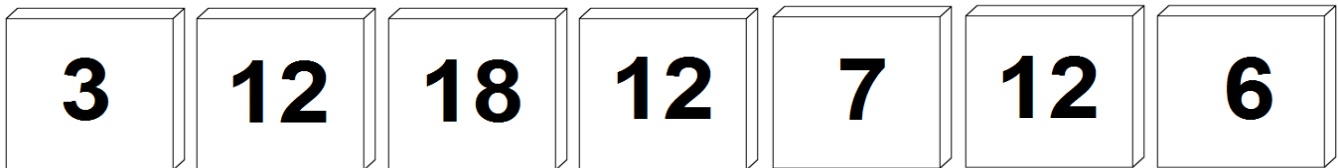


median - _____

mode - _____

range - _____

mean - _____



median - _____

mode - _____


range - _____

mean - _____

ANSWER KEY

Mean, Median, Mode, and Range

Find the mean, median, mode, and range for each set of numbers.



median - 2

mode - 1

range - 5

mean - 3




median - 7

mode - 7

range - 14

mean - 7



median - 12

mode - 12

range - 15

mean - 10